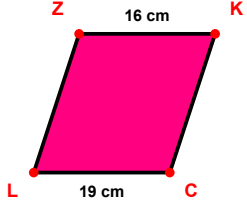
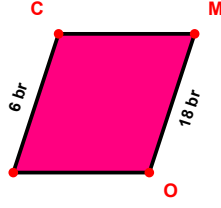


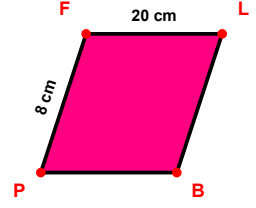
**SORU:** Aşağıdaki şekillerde verilen, kenar uzunlukları farklarını bulunuz.



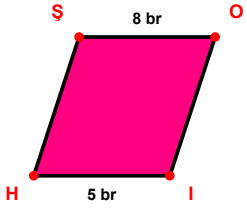
$$|CL| - |ZK| = \dots\dots\dots$$



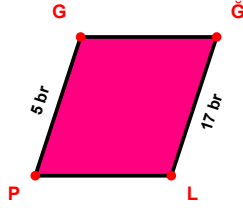
$$|MO| - |NC| = \dots\dots\dots$$



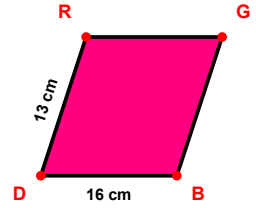
$$|FL| - |PF| = \dots\dots\dots$$



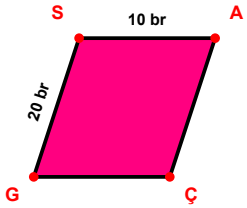
$$|ŞO| - |IH| = \dots\dots\dots$$



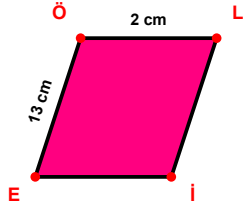
$$|ĞL| - |PG| = \dots\dots\dots$$



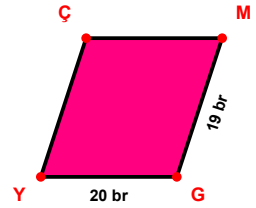
$$|BD| - |DR| = \dots\dots\dots$$



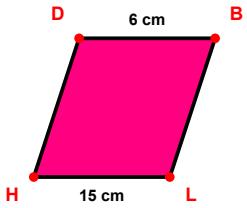
$$|GS| - |SA| = \dots\dots\dots$$



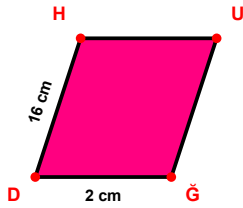
$$|EÖ| - |ÖL| = \dots\dots\dots$$



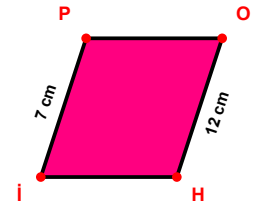
$$|GY| - |MG| = \dots\dots\dots$$



$$|LH| - |DB| = \dots\dots\dots$$

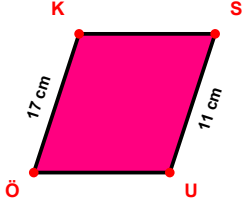


$$|DH| - |ĞD| = \dots\dots\dots$$

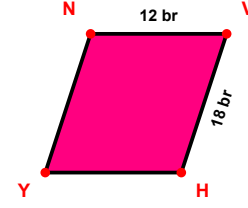


$$|OH| - |İP| = \dots\dots\dots$$

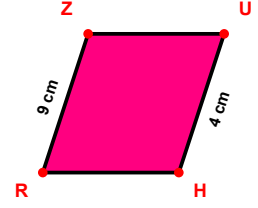
SORU: Aşağıdaki şekillerde verilen, kenar uzunlukları farklarını bulunuz.



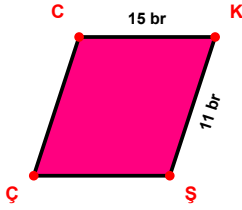
$$|ÖK| - |SU| = \dots\dots\dots$$



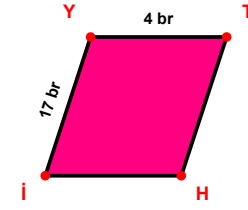
$$|VH| - |NV| = \dots\dots\dots$$



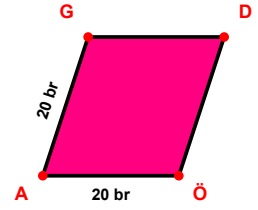
$$|RZ| - |UH| = \dots\dots\dots$$



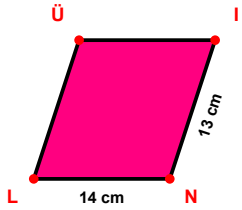
$$|CK| - |KS| = \dots\dots\dots$$



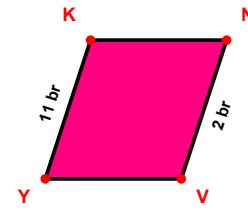
$$|İY| - |YT| = \dots\dots\dots$$



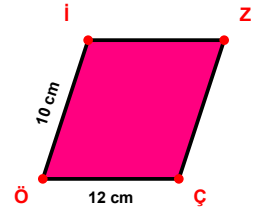
$$|ÖA| - |AG| = \dots\dots\dots$$



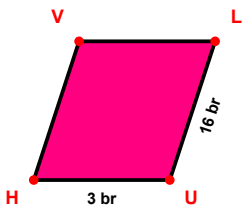
$$|NL| - |IN| = \dots\dots\dots$$



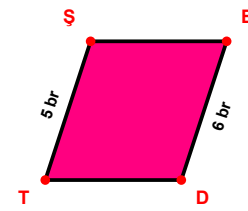
$$|YK| - |NV| = \dots\dots\dots$$



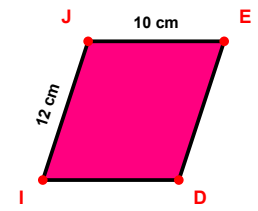
$$|ÇÖ| - |Öİ| = \dots\dots\dots$$



$$|LU| - |UH| = \dots\dots\dots$$



$$|BD| - |TŞ| = \dots\dots\dots$$



$$|İJ| - |JE| = \dots\dots\dots$$

## SÜREÇ ODAKLI DEĞERLENDİRME ÖLÇEĞİ

Doğru Sayısı: ..... / 24

Öğretmen ilgili kutucuğu işaretler.

Geliştirilmeli (0-8)

İyi (9-14)

Çok İyi (15-20)

Mükemmel (21-24)

☐
☐
☐
☐

Hazırlayan: .....

Bu bölüme sınıfınızın ilgili kazanıma yönelik genel durumuna ilişkin gözlem ve izlenimlerinizi, öğrencilerinizin bu kazanımla ilgili öğrenme eksikliklerini ve bu eksikliklerin giderilmesi amacıyla yaptığınız/yapmayı planladığınız faaliyetleri not edebilirsiniz.

No	Adı - Soyadı	Toplam Puan	Değerlendirme
1			
2			
3			
4			
5			
6			
7			
8			
9			
10			
11			
12			
13			
14			
15			
16			
17			
18			
19			
20			
21			
22			
23			
24			
25			
26			
27			
28			
29			
30			
31			
32			
33			
34			
35			

Hazırlayan: .....